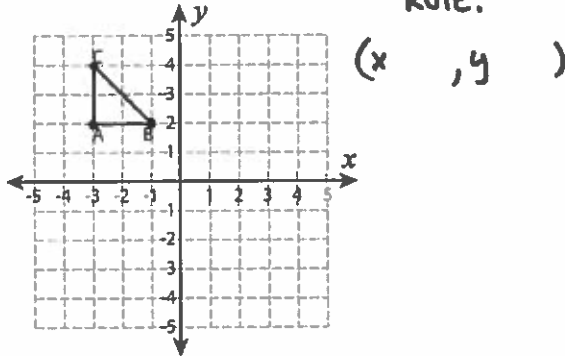


## Write the New Coordinates

Graph the image of each figure after the given translation. Also write the coordinates of the image.

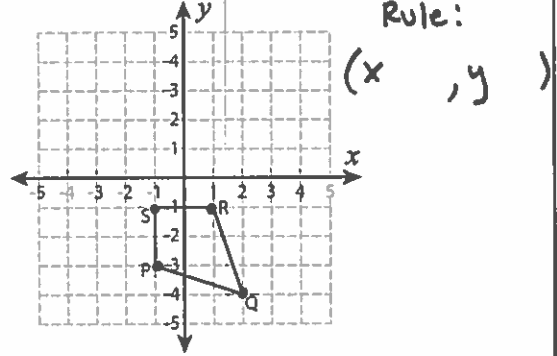
- 1) 1 unit down and 4 units right → Write the Rule:



A': \_\_\_\_\_, B': \_\_\_\_\_

C': \_\_\_\_\_

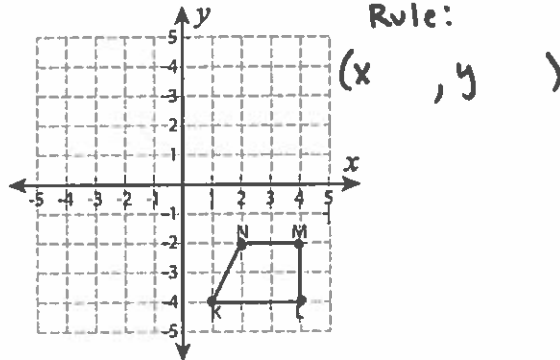
- 2) 2 units right and 5 units up → Write the Rule:



P': \_\_\_\_\_, Q': \_\_\_\_\_

R': \_\_\_\_\_, S': \_\_\_\_\_

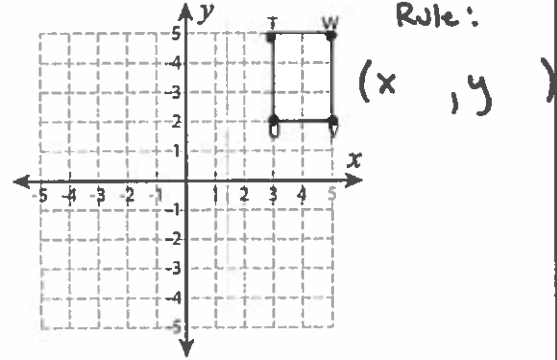
- 3) 6 units up and 6 units left → Write the Rule:



K': \_\_\_\_\_, L': \_\_\_\_\_

M': \_\_\_\_\_, N': \_\_\_\_\_

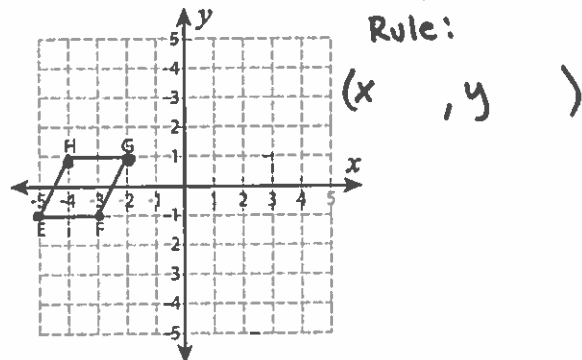
- 4) 8 units left and 7 units down → Write the Rule:



T': \_\_\_\_\_, U': \_\_\_\_\_

V': \_\_\_\_\_, W': \_\_\_\_\_

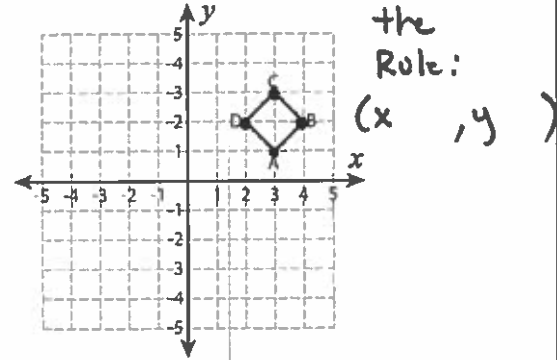
- 5) 7 units right → Write the Rule:



E': \_\_\_\_\_, F': \_\_\_\_\_

G': \_\_\_\_\_, H': \_\_\_\_\_

- 6) 4 units down and 6 units left → Write the Rule:



A': \_\_\_\_\_, B': \_\_\_\_\_

C': \_\_\_\_\_, D': \_\_\_\_\_